

**MODERN CHILD PUBLIC SCHOOL**  
**WINTER VACATION HOLIDAYS HOMEWORK 2025**  
**CLASS : 3<sup>rd</sup>**

**ENGLISH:**

- Learn Chapter - 13, 14, 15 and 16

*Do the assignment in your English grammar notebook*

Q1. Fill in the blanks with correct preposition from the options given below

1. They went home \_\_\_ bus. ( by / to )
2. She sat \_\_\_\_ him at the party. ( beside /between)
3. He lives at Rohini \_\_\_\_ Delhi. ( on/in )
4. The frog jumped \_\_\_\_ the pool. (in/ into)
5. The bird is flying \_\_\_\_ the roof. (near/ over)

Q2. Fill in the blanks with correct adverb from the options below

1. Ajay lost the race because he was too \_\_\_\_\_. (slow/slowly)
  2. Arun ran \_\_\_\_ to the room. (quickly/quick)
  3. Rohan did his homework\_\_\_\_\_. (neatly/neat)
  4. Susan plays the piano \_\_\_\_\_. (beautifully/beautiful)
- The police checked the black bag \_\_\_\_\_.(careful/carefully)

**HINDI:**

1. प्रतिदिन एक पेज सुलेख लिखिए।
2. प्रतिदिन 10 शब्द श्रुतलेख लिखिए।
3. पाठ 13 14 15 16 का अभ्यास कीजिए।
4. हिंदी वर्कबुक पूर्ण करो।

**MATHS:**

*Do this assignment in your math's notebook.*

Q1. Bob has 25 apples. He ate  $\frac{1}{5}$  of them as he was hungry. How many apples did he eat?

- a) 25                                      b) 20  
c) 5                                         d) None of these

Q2. Write the fraction shaded in the picture.



- a)  $\frac{5}{9}$                                       b)  $\frac{1}{9}$   
c)  $\frac{2}{9}$                                       d)  $\frac{7}{9}$

Q3. Fill in the blanks:

- 1 km = \_\_\_\_\_ m
- 1 m = \_\_\_\_\_ cm
- 1 km = \_\_\_\_\_ cm

Q4. Add the following:

- 72 m 50 cm + 15 m 75 cm
- 102 m 25 cm + 375 m 85 cm

Q5. Convert 5 days 9 hours into hours

- a) 119 hours                              b) 129 hours  
c) 127 hours                              d) None of these

Q6. Convert 5 hours 45 minutes into minutes

- a) 345                      b) 245  
c) 445                      d) None of these

Q7. How many months have 30 days in a year?

- a) 5                          b) 6  
c) 4                          d) 3

Q8. How many months have 31 days in a year?

- a) 6                          b) 7  
c) 8                          d) None of these

Q9. Change the following into paise

- a) Rs. 65 = \_\_\_\_\_  
b) Rs. 625 = \_\_\_\_\_  
c) Rs. 92.45 = \_\_\_\_\_  
d) Rs. 972.75 = \_\_\_\_\_








Q10. Convert the following into rupees and paise

- a) 920 P = \_\_\_\_\_  
b) 2775 P = \_\_\_\_\_

Q11. Add : Rs 787.25 & Rs 47.687.

Q12. Subtract : Rs 23.43 from Rs 88.95

Q13. The following pictograph shows the data on the number of hours a student spends on a particular activity during the day.

Activity	Number of hours	 = 2 hours
Sleeping		
Eating		
Studying		
Playing		
Watching TV		
Miscellaneous		

Answer the following questions:

- (i) How many hours does the student spend studying, playing and watching TV?  
(ii) How many hours does the student spend eating and sleeping?

### EVS:

1. Read Lesson -11 and Lesson -12. Learn Question Answers of these chapters.
2. Try to complete Science worksheets from **CREATIVE LEARNING PRACTICE WORKSHEETS**.